


# On the Farm


## I Spy and Add to 10 Answers

Count the number of each type of farm picture needed in the addition number sentence. Write the numbers in the boxes to create and then solve an addition number sentence.



5


+



1


=

6



4


+



4


=

8



6


+



2

=

8



7

+



3


=

10



3

+



1

=

4