

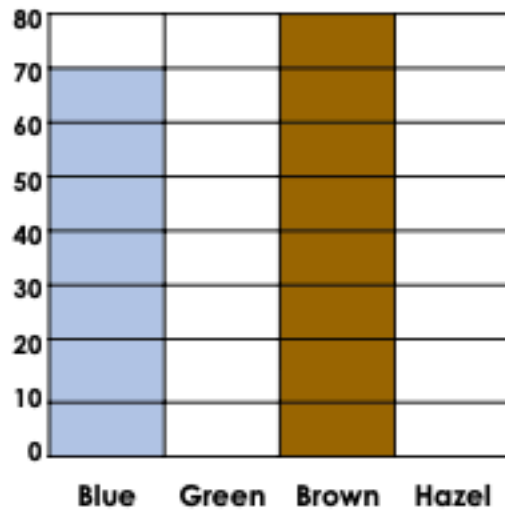
## Bar Charts

## Bar Charts

1b. Use the information to complete the pictogram and the bar chart.

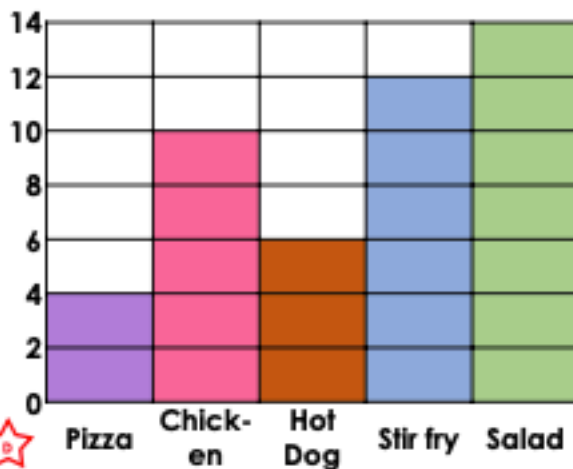
Eye Colour	Number of Children
Blue	
Green	●
Brown	
Hazel	● ● ● ●

1 circle = 10 children



3 VF

2b. Use this bar chart to answer the questions about the favourite school dinner.




- Which dinner is least popular?
- How many more children like salad than hot dogs?
- How many children like chicken?
- How many children were asked in total?



3 VF

3b. Create a bar chart using this tally chart. Write on the correct scale and labels.

Apples Sold	Number of Apples
Monday	I
Tuesday	I
Wednesday	
Thursday	



3 VF