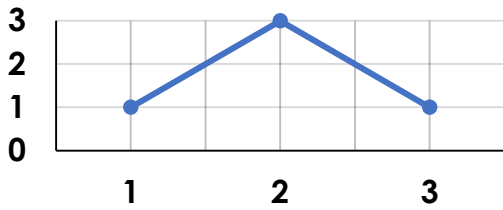


Introducing Line Graphs

1a. What is missing?

Height of a Ball Throw



Use the checklist to make sure the line graph has all items:

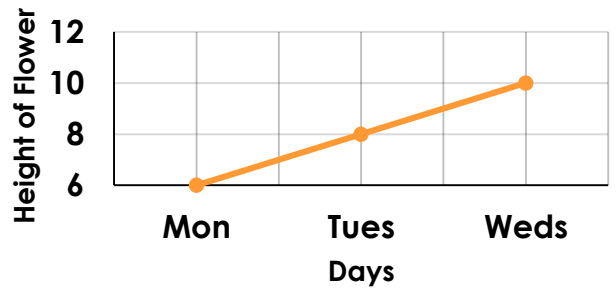
- Title
- Axis Labels
- Scales



4 VF

Introducing Line Graphs

1b. What is missing?



Use the checklist to make sure the line graph has all items:

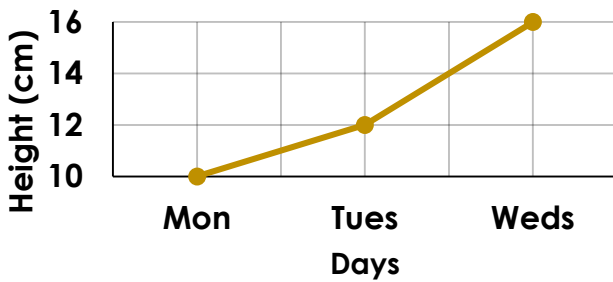
- Title
- Axis Labels
- Scales



4 VF

2a. Use the line graph to fill the gaps.

Height of a Beanstalk



The beanstalk grew the most from

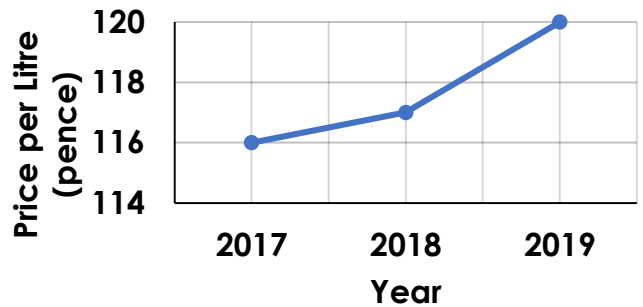
_____ to _____.



4 VF

2b. Use the line graph to fill in the gaps.

Cost of Petrol



In 2019 petrol cost _____.

In 2017 petrol cost _____.

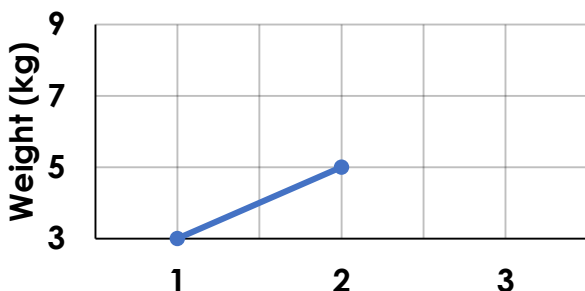


4 VF

3a. Use the data to complete the line graph.

1 month	2 months	3 months
3	5	7

Baby Aisha's Weight

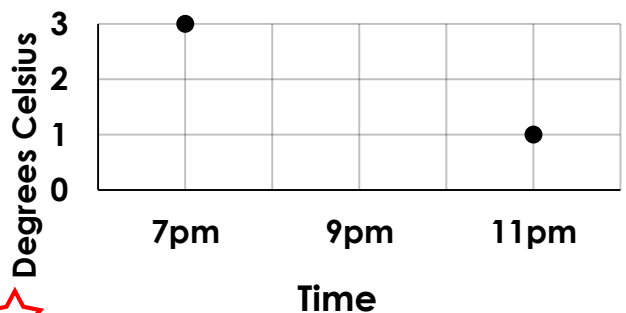


4 VF

3b. Use the data to complete the line graph.

7pm	9pm	11pm
3°	2°	1°

Evening Temperatures



4 VF