

# HOME Challenge Sheet

## Year 1 and 2



1

### How many steps?



Count how many steps it takes you to get from one side of the room to the other. Which room takes the most steps?


2

### In height order

Collect 5 items that you can hold in your hands. Now order the items from tallest to shortest.

3

### Doors or windows



Count the number of windows in your house.

Count the number of doors in your house.

Do you have more doors or windows?

4

### Numbers all around!

How many items in your house have a number on them? TV remote control, clock, etc.

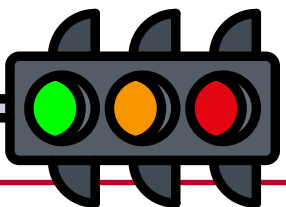
Which object has the most numbers?

5

### Traffic lights

Look around your house for red, yellow and green items. Every time you see an item of this colour write it down.

Which colour is the most popular?



6

### Weigh it up

Collect 10 items from your house. Order them from lightest to heaviest. Now order them from tallest to shortest.

7

### How many body parts?



How many people are in your house?

How many eyes in total?

How many legs?

How many noses?

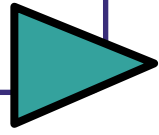
How many toes?

8

### 2D Shape Hunt

Count how many of the following shapes you can find in your house.

- Squares
- Rectangles
- Triangles



9

### How many handles?

Count how many handles are in your house. Look for doors, cupboards, windows etc. How many did you find?

10

### Maths on the Move number trail

Download and cut out the question cards and follow the answers around the house. [Download.](#)